

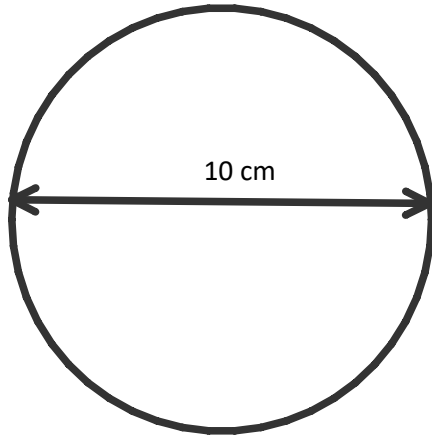
Circumference, Perimeter and Area Quiz

Thursday, January 18, 2018 10:15 AM
Show all work!

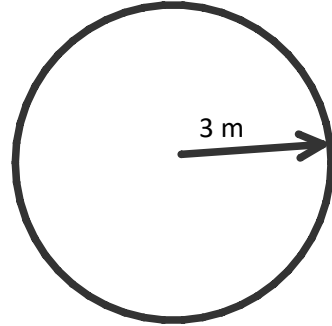
Student Name: Date:

1. What is the circumference and area of the following shapes?

A.

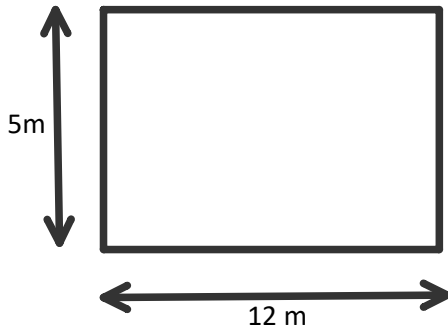


B.

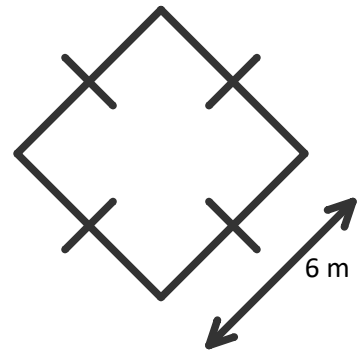


A.

2. What is the area and perimeter of the following shapes?



B.



3. If you were to paint inside this circle, but not the two smaller circles...what would the painted area be?

