

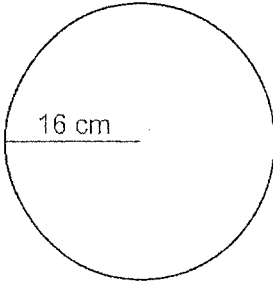
Name: _____

Class: _____

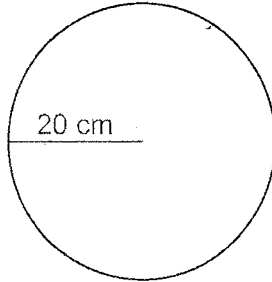
CIRCUMFERENCE AND AREA

Calculate the circumference and area of each circle.

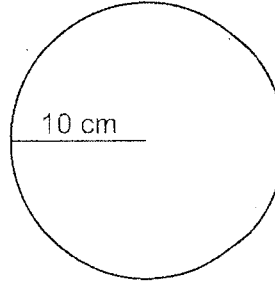
1.



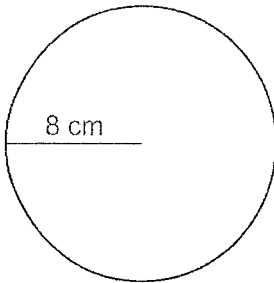
2.



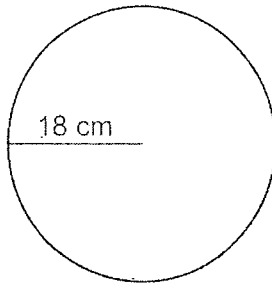
3.



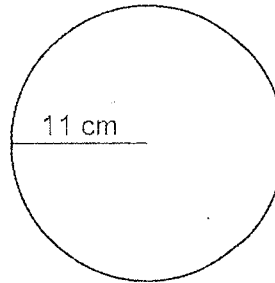
4.



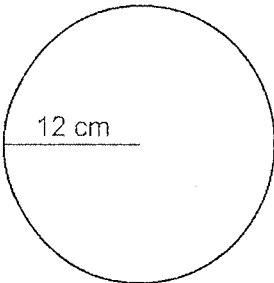
5.



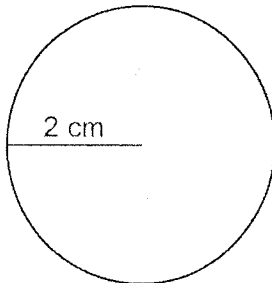
6.



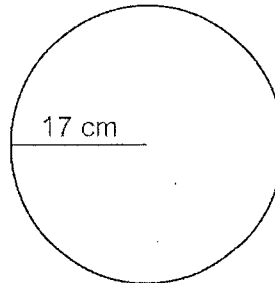
7.



8.




9.




Name _____ Period _____ Date _____

Area of a Circle

1) $A = \frac{\quad}{\quad}$
 $r = 12 \text{ in}$




2) $A = \frac{\quad}{\quad}$
 $r = 10 \text{ cm}$




3) $A = \frac{\quad}{\quad}$
 $r = 2 \text{ mm}$




4) $A = \frac{\quad}{\quad}$
 $r = 15 \text{ ft}$



5) $A = \frac{\quad}{\quad}$
 $r = 20 \text{ yd}$




6) $A = \frac{\quad}{\quad}$
 $r = 8$




7) $A = \frac{\quad}{\quad}$
 $r = 0.5 \text{ cm}$



8) $A = \frac{\quad}{\quad}$
 $r = 1 \text{ in}$



9) $A = \frac{\quad}{\quad}$
 $r = 3 \text{ miles}$

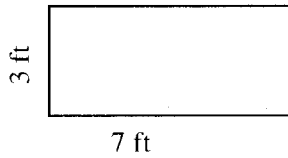


Name _____ Period _____ Date _____


Area Review

1) Area of a rectangle= _____

2) A= _____

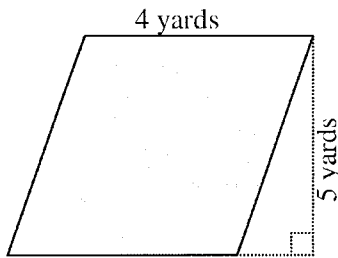


3) A= _____

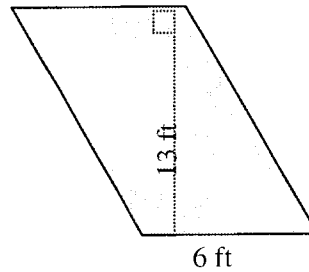


4) Area of a parallelogram= _____

5) A= _____

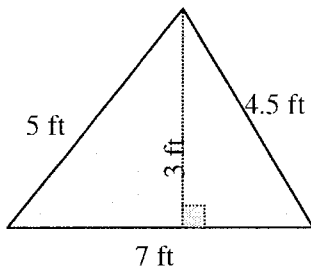


6) A= _____

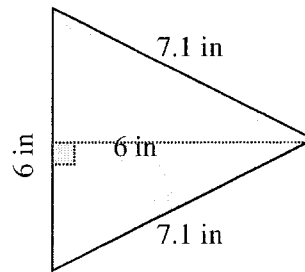


7) Area of a triangle= _____

8) A= _____

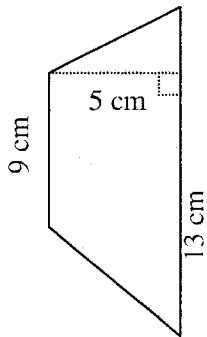


9) A= _____

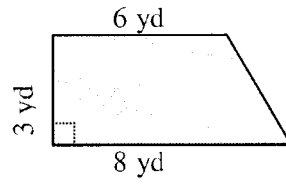


10) Area of a trapezoid= _____

11) A= _____

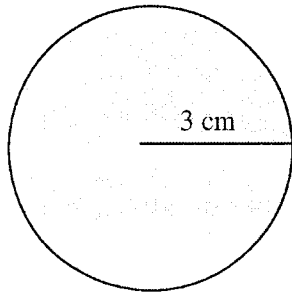


12) A= _____



13) Area of a circle= _____

14) A= _____



15) A= _____

